





Spring Test 8

Name: _____ Class: _____ Date: _____

5-second questions

1			
2	30, 80 20, 80 20, 90 40, 70		
3			
4		108	
5	110 120 130 140 ____		
6		45	
7			
8	$\frac{3}{7}$ <input type="text"/> $\frac{5}{7}$	> < =	
9			
10		70	

10-second questions

11			<div>A </div> <div>B </div>
12			
13		42	
14			
15		28	

Total marks	/15
-------------	-----

How well did you do?
Colour the numbers of the questions you got right.
Some questions may appear more than once.

Number, place value	2	5	7	8	12		
Addition and subtraction	1	2	4	6	13		
Multiplication and division	10	15					
Fractions	3	8	13				
Measurement	9	11					
Properties of shapes	14						
Position, direction							
Statistics							